


Name: _____

Ch 6.1.1 to 6.1.5 Quiz

Date: 3-28-14

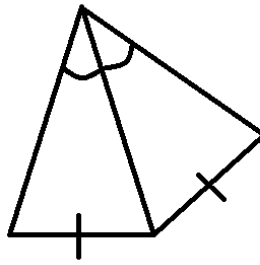
Directions: Determine whether or not the following are congruent triangles. Mark the \cong sides and angles

1.



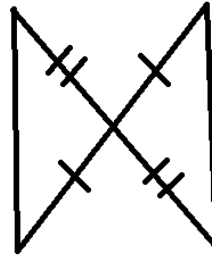
These are \cong by: _____

2.



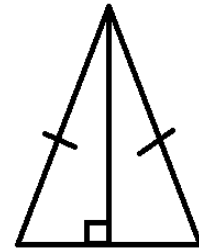
These are \cong by: _____

3.



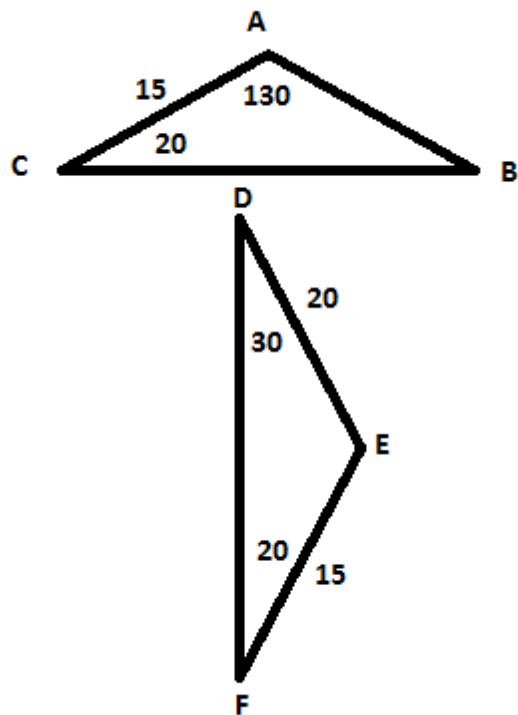
These are \cong by: _____

4.



These are \cong by: _____

5. Flow Charts: Create a flow chart for the following. The first bubble is always the given!

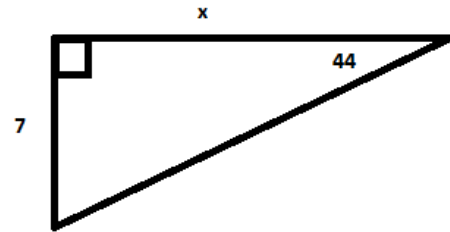
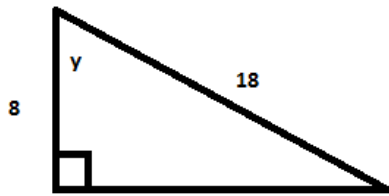


Name: _____

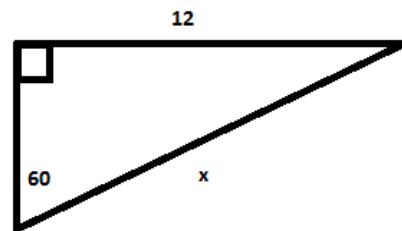
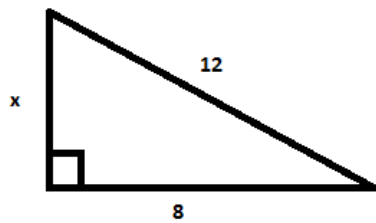
Ch 6.1.1 to 6.1.5 Quiz

Date: 3-28-14

6. Calculate the value of the variable in each triangle. You may round your answer.



7. Calculate the EXACT value of x



8. Find the Area and Perimeter of the shape below.

